

What Kind of Person Falls in Love with Either a Dairy Farmer or a Poet?

Divide each number line as indicated. Label each point. Then write the letter of each exercise above the number line at the corresponding point.


E $\frac{3}{2}$ **O** $\frac{6}{2}$ **W** $\frac{4}{2}$ **O** $\frac{1}{2}$ **H** $2\frac{1}{2}$ **N** $\frac{2}{2}$

halves



T $\frac{4}{3}$ **O** $\frac{8}{3}$ **A** $\frac{2}{3}$ **S** $1\frac{2}{3}$ **N** $\frac{3}{3}$ **T** $\frac{7}{3}$ **W** $\frac{1}{3}$

thirds




Y $\frac{5}{4}$ **R** $\frac{9}{4}$ **A** $\frac{2}{4}$ **O** $\frac{8}{4}$ **R** $\frac{4}{4}$ **F** $1\frac{3}{4}$ **M** $\frac{1}{4}$ **R** $\frac{3}{4}$

fourths



E $\frac{8}{5}$ **R** $\frac{15}{5}$ **T** $\frac{4}{5}$ **O** $2\frac{3}{5}$ **U** $\frac{2}{5}$ **R** $\frac{10}{5}$ **B** $\frac{0}{5}$ **T** $1\frac{1}{5}$

fifths



S $\frac{20}{8}$ **R** $\frac{7}{8}$ **E** $\frac{14}{8}$ **O** $\frac{4}{8}$ **E** $2\frac{7}{8}$ **F** $\frac{1}{8}$ **R** $\frac{17}{8}$ **V** $1\frac{3}{8}$

eighths



Why Do Teenagers Get Together at Big Burger Restaurant?

Complete each exercise and find your answer in the set of boxes under the exercise. Write the letter of the exercise in the box containing the answer.

I Write a fraction for the part that is shaded.

R



A



I



E




T



S



C



P



E



T




F




$\frac{3}{8}$	$\frac{9}{10}$	$\frac{3}{5}$	$\frac{2}{9}$	$\frac{2}{5}$	$\frac{9}{16}$	$\frac{4}{9}$	$\frac{1}{6}$	$\frac{1}{3}$	$\frac{13}{16}$	$\frac{3}{4}$	$\frac{5}{8}$	$\frac{5}{7}$	

II Write a fraction for the part that is named.



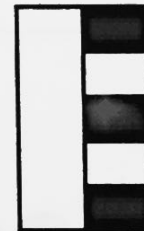
P shaded

A unshaded




E shaded

N unshaded




A shaded

I unshaded



M shaded

G unshaded



C in the

E in the

L not in the

T in either the or the

$\frac{4}{15}$	$\frac{13}{24}$	$\frac{5}{12}$	$\frac{18}{24}$	$\frac{7}{10}$	$\frac{4}{9}$	$\frac{11}{15}$	$\frac{7}{24}$	$\frac{7}{12}$	$\frac{11}{24}$	$\frac{3}{10}$	$\frac{9}{24}$	$\frac{5}{9}$	